



**BURARI PUBLIC SCHOOL**

...a venture with **UNIQUE**



# Holiday HOMEWORK

NAME \_\_\_\_\_

CLASS- \_\_\_\_\_

Dear Parents,

Summer Vacations! A wonderful time to rejoice, recreate, and refresh for all children. It is an appropriate period for parents to spend quality time with their children, discover their hidden potential, nurture their talents, and boost their self-esteem.

- Vacations give children a chance to relax and rejuvenate. Along with relaxation, there should be a healthy balance of play and meaningful learning activities. Encourage your child to engage in constructive and creative work, as it enhances confidence and independent thinking.
- As envisioned in the National Education Policy (NEP), children should be encouraged to develop life skills, critical thinking, creativity, communication skills, and experiential learning habits during the holidays. Motivate them to participate in hands-on activities such as art and craft, storytelling, reading, gardening, cooking with supervision, nature observation, puzzles, and simple household responsibilities.
- Encourage your child to read age-appropriate books, newspapers, and magazines regularly to improve vocabulary, comprehension, and communication skills.
- Promote skill-based learning by involving your child in activities that develop problem-solving abilities, teamwork, digital awareness, and self-management skills.
- Encourage your child to eat healthy food and maintain proper hygiene and fitness routines.
- Take your child for outings and fun activities. Try to spend maximum quality time with him/her and develop an everlasting bond.
- Make sure that your child completes his/her Holiday Homework neatly and independently.
- Help your child inculcate good habits such as discipline, kindness, punctuality, responsibility, and respect for others.
- Recite stories to your child and encourage him/her to narrate them in their own words to improve imagination and speaking skills.
- Converse with your child in English regularly to enhance fluency and confidence in communication.

***Students will be assigned marks for PT-2 upon submission of Holiday Homework. In case a student fails to submit the Holiday Homework, he/she will be marked Zero/Absent for Periodic Assessment – 2.***

Holiday Homework **submission period will be from 22/06/2026 to 02/07/2026.** No Holiday Homework will be accepted after 02/07/2026 under any circumstances

We hope that your child will enjoy these activities and return to school with renewed energy, enthusiasm, and creativity.

***NOTE: The school will reopen on 01/07/2026.***

Kindly complete all the work as directed and submit it in a separate folder.

Regards,  
Class Teacher

# ENGLISH

- **ACTIVITY 1: CREATIVE WRITING**

✓ **Objective:** To Improve writing skills

Write 100- 150 words on the given topics. You can draw pictures also. Do this work on an A-3 size sheet.

1. “If I had superpowers...”
2. “My dream school...”

- **ACTIVITY 2: PICTURE DESCRIPTION**

✓ **Objective :** To understand the picture and make sentence using it.

Paste a picture (family, park, market, etc.) in your English -II notebook .  
Write 8–10 sentences describing it.

- **ACTIVITY 3 : VOCABULARY BUILDING**

Collect 10 new words from newspapers or books.

Write their meanings and use them in sentences.

Decorate it with pictures. Do this work in English -II notebook.

- **ACTIVITY 4 : SPEAKING TASK**

Practice speaking on any one of the following topic for 1–2 minutes:

1. My Favorite Teacher
2. Importance of Trees

Be ready to present it in class after the holidays.



**BURARI PUBLIC SCHOOL**  
... a venture with **UNIQUE**

PERIODIC TEST – II (2026-27)

CLASS –IV

SUBJECT- ENGLISH -I

DATE \_\_\_\_\_

M.M – 20

NAME: \_\_\_\_\_ ROLL NO - \_\_\_\_\_ T. SIGN \_\_\_\_\_

**GENERAL INSTRUCTIONS:**

- All questions are compulsory. Read the questions carefully before answering.
- Write your answers neatly and legibly.
- Write the correct question number before each answer.
- Marks are indicated against each question.
- This paper is divided into four sections A,B,C,D.
- Section A contains 5 questions of 1 marks each.
- Section B contains 3 questions of 2 marks each.
- Section C contains 2 questions of 3 marks each.
- Section D contains 2 questions of 3 marks .

**Note:** As per the guidelines of the New Education Policy (NEP), this holiday homework assessment will be conducted as an Open Book Assessment.

Students are encouraged to refer to their textbooks, notebooks, and other learning resources while completing the assignment. The focus of this assessment is on understanding, application, and expression of ideas rather than rote learning. Students are advised to maintain honesty and originality in their work.

**SECTION -A**

**Q 1) Choose the correct option :-**

**(5 Marks)**

**1. How do the dragons sing?**

- a. in sweet voices      b. in cacophonous chorus      c. in confusing voices  
d. in delightful voices

**2. The dragons sing of their \_\_\_\_\_**

- a. defeat      b. friends      c. sadness      d. glory

**3. Enchanted means affected by**

- a. hardwork      b. luck      c. magic      d. doubt

**4. The first word Miss Sullivan taught Helen was**

- a. hat                      b. plane                      c. doll                      d. kite

**5. Helen could not**

- a. walk                      b. speak                      c. see or hear                      d. write

**SECTION -B**

**Q 2) Answer the following questions in 20-30 words.**

**(6 Marks)**

- a) What is the poem 'The Dragons are Singing Tonight ' about?  
b) What do the dragons sing about?  
c) When and where was Helen born?

**SECTION -C**

**Q 3) Answer the following questions in 40-50 words.**

**(6 Marks)**

- a) What was the most important thing that Helen finally realised?  
b) ' A teacher takes a hand, opens a mind, and touches a heart.' Explain this in the context of Helen Keller 's life.

**SECTION -D**

**Q 4) Read the sentence and answer the following question.**

**(3 Marks)**

1. "To sing in cacophonous chorus

**And fill the whole world with their sound."**

- a) Why do you think the dragons will sing in cacophonous chorus ?  
b) Why do you think they wanted the world to hear them?



**BURARI PUBLIC SCHOOL**  
... a venture with **UNIQUE**

PERIODIC TEST – II (2026-27)

CLASS – IV

SUBJECT - ENGLISH II

DATE \_\_\_\_\_

M.M – 20

NAME: \_\_\_\_\_ ROLL NO: \_\_\_\_\_ T. SIGN: \_\_\_\_\_

**INSTRUCTIONS:**

1. All questions are compulsory. Read the questions carefully before answering.
2. Write your answers neatly and legibly.
3. Write the correct question number before each answer.
4. Marks are indicated against each question.
5. This paper is divided into three sections A,B,C.
6. Section A contains 5 questions of 1 marks each.
7. Section B contains 4 questions of 10 marks
8. Section C contains 1 question of 5 marks .

Note: As per the guidelines of the New Education Policy (NEP), this holiday homework assessment will be conducted as an Open Book Assessment. Students are encouraged to refer to their textbooks, notebooks, and other learning resources while completing the assignment. The focus of this assessment is on understanding, application, and expression of ideas rather than rote learning.

Students are advised to maintain honesty and originality in their work.

**SECTION- A**

Q1. Read the passage carefully and answer the following questions. (5×1=5 marks)

Once upon a time, there lived a poor woodcutter in a village. Every day, he went to the forest to cut wood and earn his living. One day, while cutting a tree near a river, his axe slipped from his hand and fell into the water. The woodcutter became very sad because it was his only axe. Suddenly, a fairy appeared near the river. She asked the woodcutter why he was crying. He told her the truth about his lost axe.

The fairy dived into the river and brought out a golden axe. She asked if it was his. The woodcutter said no. Then she brought a silver axe, but again he said no. Finally, she brought his old iron axe. The woodcutter happily said it was his. The fairy was pleased with his honesty and rewarded him with all three axes.

A. Answer the following questions:

1. What did the woodcutter do for a living?

2. Where did the woodcutter lose his axe?
3. Who helped the woodcutter?
4. Which axe belonged to the woodcutter?
5. Why did the fairy reward him?

### SECTION- B

**Q2. Rewrite these sentences using capital letters where required. (2 Marks)**

1. mohan's father bought a toy car for him from a toy shop.
2. for the birthday party, seven large pizzas were purchased.
3. aunt anu and uncle amit bought a gift for radha from the shop.
4. ruskin bond lives in landour in mussoorie.

**Q3. Circle the word that has been used incorrectly. Write the correct plural form (3Marks)**

1. They are very good childs.
2. There are many big city and town in India.
3. Father purchased new furnitures for the house.

**Q4. Change the gender of the highlighted nouns. (3Marks)**

1. The man and his wife boarded the train at Nagpur.
2. My uncle will come along with his son.
3. The waitress took our order for lunch.

**Q5. Write the antonym form of the highlighted word. (2 Marks)**

1. This is the end of the story.
2. The class was very noisy at lunch.

### SECTION- C

**Q6. School Event Notice (1×5=5 Marks)**

**Your school is organizing a drawing competition for students of Classes IV and V. As the Head Boy/Head Girl, write a notice informing students about the event, date, time, and venue.**

**Word Limit: 40–50 words**

# हिन्दी

## • गतिविधि - 1

शीर्षक - संज्ञा और उसके भेद का चार्ट बनाइए ।

निर्देश - संज्ञा की परिभाषा और उसके भेद को लिखकर सुन्दर सा चार्ट बनाइए ।

## • गतिविधि - 2

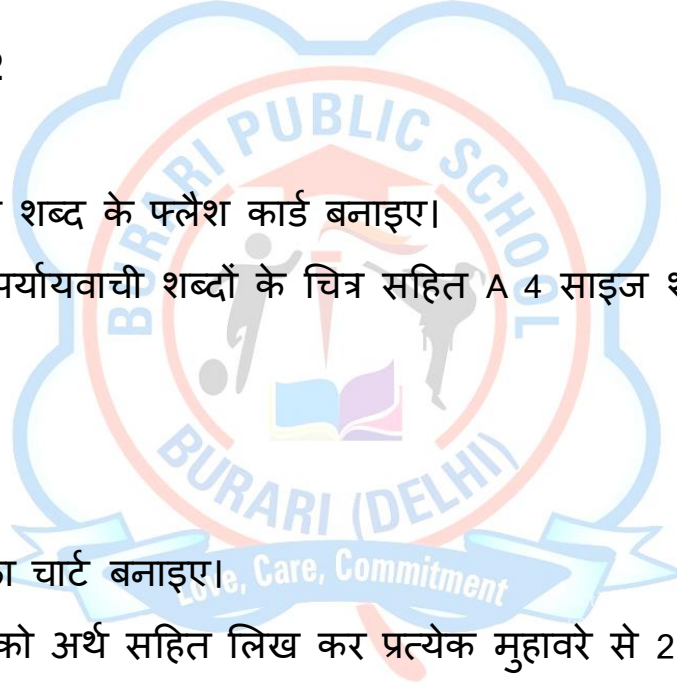
शीर्षक - पर्यायवाची शब्द के फ्लैश कार्ड बनाइए।

निर्देश - किन्हीं 5 पर्यायवाची शब्दों के चित्र सहित A 4 साइज शीट पर बनाइए ।

## • गतिविधि- 3

शीर्षक - मुहावरों का चार्ट बनाइए।

निर्देश 5 मुहावरों को अर्थ सहित लिख कर प्रत्येक मुहावरे से 2 वाक्य बनाइए।





**BURARI PUBLIC SCHOOL**  
... a venture with **UNIQUE**

आवधिक परीक्षण – II (२०२६-२७)

कक्षा – चौथी

विषय - हिंदी

दिनांक : \_\_\_\_\_

कुल अंक: २०

नाम: \_\_\_\_\_ अनुक्रमांक : \_\_\_\_\_ शिक्षक हस्ताक्षर : \_\_\_\_\_

**निर्देश:**

१. प्रश्न पत्र को ध्यान से पढ़ें।

२. सभी प्रश्नों का उत्तर दें।

३. लिखावट साफ और सुंदर होनी चाहिए।

४. प्रश्न - पत्र में चार खण्ड हैं क, ख, ग, घ में विभाजित हैं।

५. खण्ड - क में अपठित-गद्यांश, खण्ड -ख में व्याकरण, खण्ड -ग में कहानी लेखन, खण्ड - घ में प्रश्न - उत्तर हैं।

नोट: नई शिक्षा नीति (NEP) के दिशानिर्देशों के अनुसार, इस अवकाशकालीन "हकार्य मूल्यांकन को खुली पुस्तक मूल्यांकन (OBT) के रूप में आयोजित किया जाएगा। छात्रों को गृहकार्य पूरा करते समय अपनी "पाठ्यपुस्तकों, नोटबुक और अन्य शिक्षण संसाधनों का उपयोग करने के लिए प्रोत्साहित किया जाता है।" इस मूल्यांकन का मुख्य उद्देश्य रटने के "बजाय विचारों की समझ, अनुप्रयोग और अभिव्यक्ति पर है। छात्रों को अपने कार्य में ईमानदारी और मौलिकता बनाए रखने की सलाह दी जाती है।

(खंड – क) अपठित गद्यांश

प्रश्न १ . गद्यांश पढ़कर प्रश्नों के उत्तर दीजिए?

(५ अंक)

सिनेमा मनोरंजन का एक लोकप्रिय और सस्ता साधन है। छोटे-बड़े, अमीर-गरीब सभी सिनेमा देखना पसंद करते हैं। सिनेमा की दिलचस्प कहानियाँ देखने वालों के दिलों पर जादू कर देती हैं। फ़िल्मों में किसी-न-किसी कहानी को लेकर बनाई जाती हैं। लगभग हर फ़िल्म में कोई-न-कोई संदेश होता है। कुछ फ़िल्मों ने तो लोगों के मन में देश-प्रेम की भावना जगाई और कुछ ने सामाजिक बुराइयों को दूर करने का प्रयास किया। कुछ हास्य से भरपूर हँसा-हँसाकर लोट-पोट कर देती हैं। फ़िल्मों के मधुर गीत-संगीत सुनकर मन

झूम उठता है और उनके सुंदर मनमोहक दृश्य देखकर चिंता और तनाव दूर हो जाता है।

दिए गए प्रश्नों के सही उत्तर पर सही (✓) का निशान लगाइए:

(क) सिनेमा मनोरंजन का कैसा साधन है?

(अ) सस्ता

(ब) महँगा

(स) अच्छा

(द) लोकप्रिय और सस्ता

(ख) सिनेमा देखना कौन पसंद करता है?

(अ) बच्चे

(ब) बूढ़े

(स) अमीर-गरीब

(द) सभी लोग

(ग) हर फ़िल्म में क्या खास बात होती है?

(अ) नायक

(ब) नायिका

(स) गीत-संगीत

(द) संदेश

(घ) फ़िल्मों के गीत-संगीत का क्या असर होता है?

(अ) मन परेशान हो जाता है

(ब) मन प्रसन्न हो जाता है

(स) चिंता दूर हो जाती है

(द) मन में अच्छे विचार आते हैं

(ङ) इस गद्यांश का उचित शीर्षक क्या हो सकता है?

(अ) सिनेमा

(ब) सिनेमा के लाभ

(स) सिनेमा का प्रभाव

(द) सिनेमा और समाज

(खंड – ख) व्याकरण

प्रश्न २ . निम्नलिखित प्रश्नों के उत्तर दीजिए?

(५ अंक)

(क) नीचे दिए गए शब्दों के दो-दो पर्यायवाची शब्द लिखिए—

(१) सूर्य -

(२) आँख -

(३) पक्षी -

(४) माता -

(५) मित्र -

(६) चाँद -

(ख) निम्नलिखित शब्दों के विलोम शब्द लिखिए -

(१) उजाला -

(२) सुंदर -

(३) उदय -

(४) साहसी -

(खंड - ग) (कहानी लेखन)

प्रश्न ३. दिए गए विषयों में से किसी एक पर कहानी लिखिए -

(५ अंक)

(क) लालच बुरी बला है

(ख) प्यासा कौआ

(खंड - घ) प्रश्न - उत्तर

प्रश्न ४. निम्नलिखित प्रश्नों के उत्तर दीजिए?

(५ अंक)

(क) कवि को माँ की डाँट कैसी लगती है?

(ख) जंगल के जानवर क्यों परेशान थे?

(ग) हाथी ने चींटी के चार दाने देखकर क्या कहा?

(घ) बच्चों को दूध पीना कब अच्छा लगता है?

(ङ) कवि को कौन कहानी सुनाता था?

# MATHEMATICS

## • TASK – 1 (MODEL MAKING)

### TOPIC: INDIAN PLACE VALUE SYSTEM MACHINE

#### ✓ **PURPOSE**

To help students understand:

Ones, Tens, Hundreds, Thousands

How numbers are formed

Carrying/borrowing in addition & subtraction

#### ✓ **MATERIALS REQUIRED**

Cardboard

Colorful sheets

Sketch pens/ glitter pens

Glue, scissor

#### ✓ **REFERENCE LINK**

<https://youtube.com/shorts/AlhlfIn-P4s?si=LKL-lIUYG0qXt1B>

#### ✓ **NOTE**

Make it attractive and above all learn mathematics from real life examples.

## • TASK – 2 (ACTIVITY BASED)

### TOPIC: GEOMETRICAL PATTERN MANDALA RANGOLI

#### ✓ **PURPOSE**

To help students understand:

Geometrical shapes

Using it in a different and fun way

#### ✓ **MATERIALS REQUIRED**

A-3 size sheet (white color)

Sketch pens/ crayons/ glitter pens

#### ✓ **REFERENCE LINK**

<https://youtube.com/shorts/-GPMkz2iN-U?si=-gVYnoOYydmCpgRv>

#### ✓ **NOTE**

Make it attractive and above all learn mathematics from real life examples



**BURARI PUBLIC SCHOOL**  
... a venture with **UNIQUE**

PERIODIC TEST – II (2026-27)  
CLASS – IV

SUBJECT - MATHEMATICS

DATE \_\_\_\_\_

M.M – 20

NAME: \_\_\_\_\_ ROLL NO: \_\_\_\_\_ T. SIGN: \_\_\_\_\_

**INSTRUCTIONS:**

- All questions are compulsory. Read the questions carefully before answering.
- Write your answers neatly and legibly.
- Write the correct question number before each answer.
- Marks are indicated against each question.

Note: As per the guidelines of the New Education Policy (NEP), this holiday homework assessment will be conducted as an Open Book Assessment.

Students are encouraged to refer to their textbooks, notebooks, and other learning resources while completing the assignment. The focus of this assessment is on understanding, application, and expression of ideas rather than rote learning. Students are advised to maintain honesty and originality in their work.

**SECTION – A**

**Q1. Tick the correct option:**

**(3 marks)**

1.  $23456 + 3456 + 456$  is equals to:

- a. 27300      b. 27360      c. 27368      d. 27000

2. The difference between 60000 and 45000 is equals to:

- a. 15000      b. 20000      c. 25000      d. 25500

3.  $75 \times 400$  is equals to:

- a. 300      b. 3,000      c. 30,000      d. 75,000

**Q2. Assertion and Reason:**

**(2 marks)**

1. **Assertion (A):**  $125 \times 4 = 500$

**Reason (R):** Multiplication is repeated addition.

**Options:**

- A. Both A and R are true, and R is the correct explanation of A  
B. Both A and R are true, but R is not the correct explanation of A  
C. A is true, but R is false  
D. A is false, but R is true

2. **Assertion (A):**  $5000 - 1500 = 3500$

**Reason (R):** Subtraction means finding the total of two numbers.

**Options:**

- A. Both A and R are true, and R is the correct explanation of A
- B. Both A and R are true, but R is not the correct explanation of A
- C. A is true, but R is false
- D. A is false, but R is true

### SECTION – B

**Q3. Arrange in columns and add:**

**(1mark)**

a.  $102597 + 22056 + 80551$

**Q4. Simplify:**  $8520 - 3000 + 1036 - 2570$

**(1mark)**

**Q5. Multiply:** 136 by 42

**(1mark)**

**Q6. Estimate the difference to the nearest 1000.**

**(1mark)**

a.  $42693 - 1924$

### SECTION – C

**Q7.** In an election, there were three candidates. The first candidate got 12,509 votes, the second candidate got 12,172 votes and the third candidate got 10,312 votes. How many votes were polled in all?

**(2 marks)**

**Q8.** There are 64,305 books in a public library. 12,543 books were issued to the members. How many books remained unissued in the library?

**(2 marks)**

**Q9.** There are 1,029 pages in a notebook. How many pages are there in 65 such notebooks.

**(2 marks)**

### SECTION – D

**Q10. Case Study Based Questions:**

**(5 marks)**

**In a library there are 24,076 books on literature, 8,536 books on science and 7,452 books on mathematics.**

- a. How many books are there in the library on these three subjects?
- b. Books on literature are more than the books on science and mathematics together. Is it true?
- c. Do you think libraries are useful for us? Should a library have a 'silence, Please' board? Why not a classroom?

# SCIENCE

## ACTIVITY 1: LEAF BOOKMARK

✓ **Aim:**

To create a decorative bookmark using natural leaves.

Materials Required:

Cardboard strip, leaves of different shapes, glue, scissors.

✓ **Procedure:**

1. Take a piece of cardboard and carefully cut it into long strips.
2. Collect small leaves of different shapes such as round, pointed, or long leaves.
3. Apply glue on the cardboard strip.
4. Stick the leaves on the strip in any design you like. Press them gently so they stick properly.
5. Keep the bookmark aside and allow it to dry completely.

## ACTIVITY 2: ANIMAL SORTING ACTIVITY

✓ **Aim:**

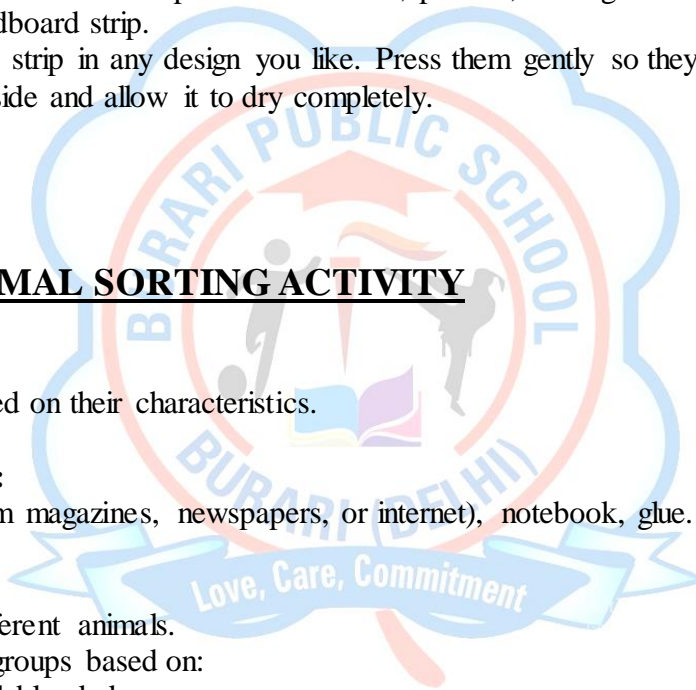
To classify animals based on their characteristics.

✓ **Materials Required:**

Pictures of animals (from magazines, newspapers, or internet), notebook, glue.

✓ **Procedure:**

1. Collect pictures of different animals.
2. Sort the animals into groups based on:
  3. Warm-blooded or cold-blooded
  4. Living on land or in water
  5. Laying eggs or giving birth
6. Paste the sorted pictures into your notebook under different headings.
7. Write a short description for each group, explaining why the animals belong to that group.





# BURARI PUBLIC SCHOOL

... a venture with **UNIQUE**

PERIODIC TEST – II (2026-27)

CLASS – IV

SUBJECT - SCIENCE

DATE \_\_\_\_\_

M.M – 20

NAME: \_\_\_\_\_ ROLL NO: \_\_\_\_\_ T. SIGN: \_\_\_\_\_

## INSTRUCTIONS:

- All questions are compulsory. Read the questions carefully before answering.
- Write your answers neatly and legibly.
- Write the correct question number before each answer.
- Marks are indicated against each question.

Note: As per the guidelines of the New Education Policy (NEP), this holiday homework assessment will be conducted as an Open Book Assessment.

Students are encouraged to refer to their textbooks, notebooks, and other learning resources while completing the assignment. The focus of this assessment is on understanding, application, and expression of ideas rather than rote learning.

Students are advised to maintain honesty and originality in their work.

## SECTION- A

(1 × 5 = 5 Marks)

### Q-1 Multiple choice question:-

1. Which of the following are vertebrates?

- a) Dog
- b) Fish
- c) Earthworm
- d) Bird

2. Which animals lay eggs?

- a) Hen
- b) Frog
- c) Cow
- d) Snake

3. Which of the following are invertebrates?

- a) Ant
- b) Snail

- c) Tiger
- d) Spider

**4. Assertion (A): Birds lay eggs.**

**Reason (R): Birds are oviparous animals.**

**5. Assertion (A): All animals give birth to young ones.**

**Reason (R): Some animals lay eggs.**

- 1. Both A and R are true and R is the correct explanation of A.
- 2. Both A and R are true, but R is not correct explanation of A.
- 3. A is true but R is false.
- 4. A is false but R is true.

**SECTION-B**

**( 2 × 2 = 4 Marks)**

**Q-2. Short Answer Questions:**

- 1. What are vertebrates?
- 2. What is reproduction?

**SECTION-C**

**( 3 × 2 = 6 Marks)**

**Q-3. Long Answer Questions:**

- 1. Differentiate between vertebrates and invertebrates.
- 2. Explain the two main methods of reproduction in animals.

**SECTION-D**

**(1 × 5 = 5 Marks)**

**Q-4 Read the case study carefully and answer the following question given below: -**

**Riya visited a zoo with her parents. She saw many animals like a lion, elephant, snake, frog, and butterfly. The lion and elephant had backbones, while the snake also had a backbone but moved differently. The butterfly did not have a backbone and had wings to fly. The frog could live both on land and in water.**

- 1. Name any two animals Riya saw at the zoo.
- 2. Which animal can live both on land and in water?
- 3. Which animal does not have a backbone?
- 4. What type of animals are lion and elephant? (Vertebrates/Invertebrates)
- 5. How does a snake move?

# SOCIAL SCIENCE

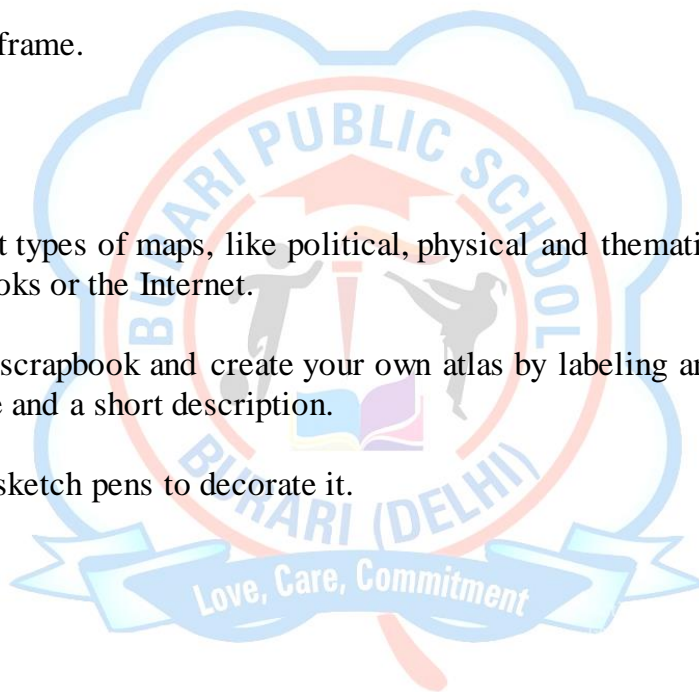
## • ACTIVITY ZONE

### ✓ **Art Integration**

1. Collect and paste pictures of different wildlife species found in the Himalayas. Make a collage using those pictures.
2. Make it attractive and decorate it.
3. Use a creative frame.

### ✓ **IMT Skills**

1. Collect different types of maps, like political, physical and thematic maps from newspapers, books or the Internet.
2. Paste them in a scrapbook and create your own atlas by labeling and decorating each page with a title and a short description.
3. Use colors and sketch pens to decorate it.





# BURARI PUBLIC SCHOOL

... a venture with **UNIQUE**

PERIODIC TEST – II (2026-27)

CLASS – IV

SUBJECT – SOCIAL SCIENCE

DATE \_\_\_\_\_

M.M – 20

NAME: \_\_\_\_\_ ROLL NO: \_\_\_\_\_ T. SIGN: \_\_\_\_\_

## INSTRUCTIONS:

- All questions are compulsory. Read the questions carefully before answering.
- Write your answers neatly and legibly.
- Write the correct question number before each answer.
- Marks are indicated against each question.

Note: As per the guidelines of the New Education Policy (NEP), this holiday homework assessment will be conducted as an Open Book Assessment.

Students are encouraged to refer to their textbooks, notebooks, and other learning resources while completing the assignment. The focus of this assessment is on understanding, application, and expression of ideas rather than rote learning. Students are advised to maintain honesty and originality in their work.

## SECTION- A

Q1. Tick (✓) the correct answer.

(5×1=5 marks)

1. An important tributary of the Ganga River is.  
a. Satluj  
b. Ravi  
c. Yamuna  
d. Beas
2. The Brahmaputra River originates in \_\_\_\_\_.  
a. Pakistan  
b. China  
c. Tibet  
d. India
3. \_\_\_\_\_ is an important coal mining region.  
a. Sriharikota  
b. Panna  
c. Raniganj  
d. Bihar

4. Given below are two statements, A and B. Read the statements and choose the correct option.

Assertion: Karnataka is a home to some of India's most beautiful waterfalls.

Reason: Yakshgana is a popular folk dance in Karnataka .

1. Both A and R are true and R is the correct explanation of A.
2. Both A and R are true, but R is not correct explanation of A.

3. A is true but R is false.
4. A is false but R is true.

5. Given below are two statements, A and B. Read the statements and choose the correct option.

**Assertion:** The northern plains are sparsely populated.

**Reason:** This region is suitable for cultivating food crops.

1. Both A and R are true and R is the correct explanation of A.
2. Both A and R are true, but R is not correct explanation of A.
3. A is true but R is false.
4. A is false but R is true.

### SECTION- B

Q2. Answer the following questions.

(2×2=4 Marks)

1. List any four minerals found in Chhota Nagpur Plateau.
2. List any four cities that lie in the northern plains.

### SECTION- C

Q3. Answer the following questions.

(2×3=6 Marks)

1. Why are the Northern Plains called the 'Food Bowl of India'?
2. Describe the chief features of the Deccan Plateau.

### SECTION- D

Q4. Read the text given below and answer the questions that follow.

(5×1=5 Marks)

#### **The Plateaus of India**

The Plateau region of India is also known as the Peninsular Plateau. It is a large area of high land that is mostly flat on top. This region is surrounded by hills and mountains.

The Plateau has many rivers like the Narmada and Tapti. These rivers flow through valleys. The soil here is not as fertile as the Northern Plains, but it is rich in minerals like coal, iron, and mica. Because of these minerals, many industries are set up in the Plateau region. People here work in mines and factories. Some farmers grow crops like cotton and millets.

The Plateau region also has forests and wildlife. It is an important part of India's natural resources.

**Questions:-**

1. What is another name for the Plateau region of India?
2. Name two rivers that flow through the Plateau region.
3. Why is the Plateau region important for industries?
4. What kinds of crops are grown in the Plateau region?
5. How is the soil of the Plateau different from the Northern Plains?

# COMPUTER

- **ACTIVITY 1:**

**Explain the following:**

1. Definition of the computer.
2. Draw a diagram of a computer system and label its parts.
3. Collect pictures or draw 5 storage devices labeled with their names.

**- Do this work in Computer Notebook.**

- **ACTIVITY 2:**

**Uses of Computers in Daily Life**

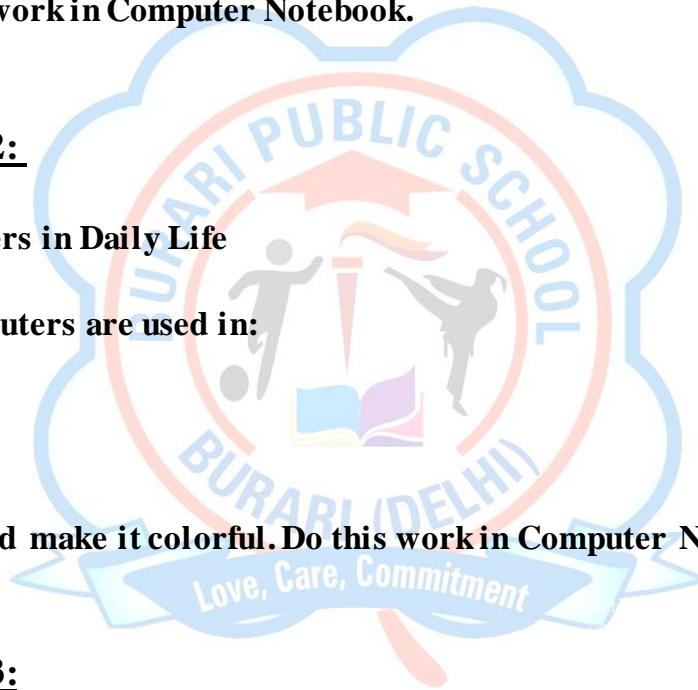
**Write how computers are used in:**

- i. Education
- ii. Banking
- iii. Hospitals

**Add pictures and make it colorful. Do this work in Computer Notebook.**

- **ACTIVITY 3:**

**Make a chart on Types of memory (Primary & Secondary).**



# WORKSHEET 1:

## DATA STORAGE IN COMPUTER

### Q 1): Multiple Choice Questions (MCQs):

1. Which of the following is a primary storage device?

- a) Hard Disk
- b) RAM
- c) Pen Drive
- d) CD-ROM

2. What does HDD stand for?

- a) Hard Disk Drive
- b) High Data Device
- c) Heavy Disk Drive
- d) Hard Data Drive

3. Which unit is used to measure data?

- a) Meter
- b) Byte
- c) Watt
- d) Volt

4. Which of the following has the largest storage capacity?

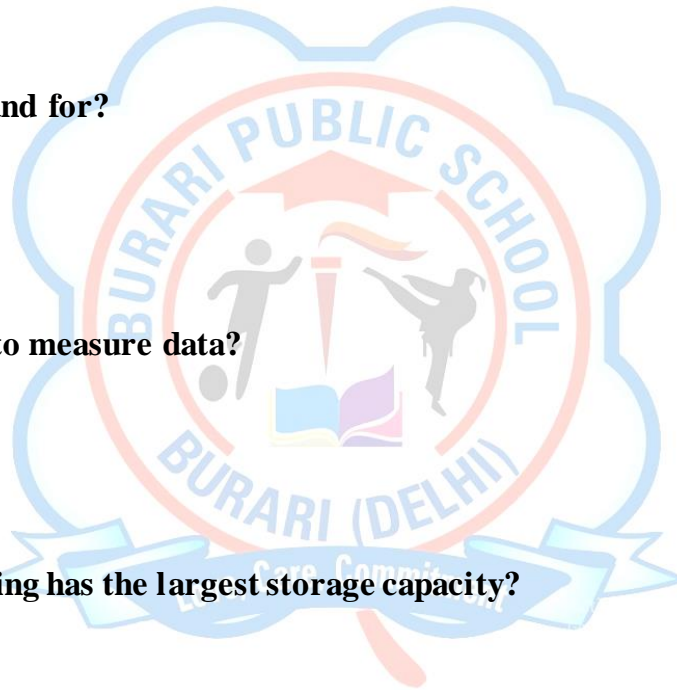
- a) KB
- b) MB
- c) GB
- d) TB

### Q 2) Fill in the Blanks:

- a) 1 Byte = \_\_\_\_\_ bits.
- b) The smallest unit of data is called a \_\_\_\_\_.
- c) \_\_\_\_\_ is temporary memory.
- d) Hard disk is an example of \_\_\_\_\_ storage.
- e) CD, DVD, and Pen Drive are examples of \_\_\_\_\_ storage devices.

### Q 3) True or False:

- 1. RAM is a permanent memory. (\_\_\_\_\_)



- 2.ROM stores data permanently. (\_\_\_\_)
- 3.A bit can store only one binary value. (\_\_\_\_)
- 4.Secondary storage is faster than primary storage. (\_\_\_\_)

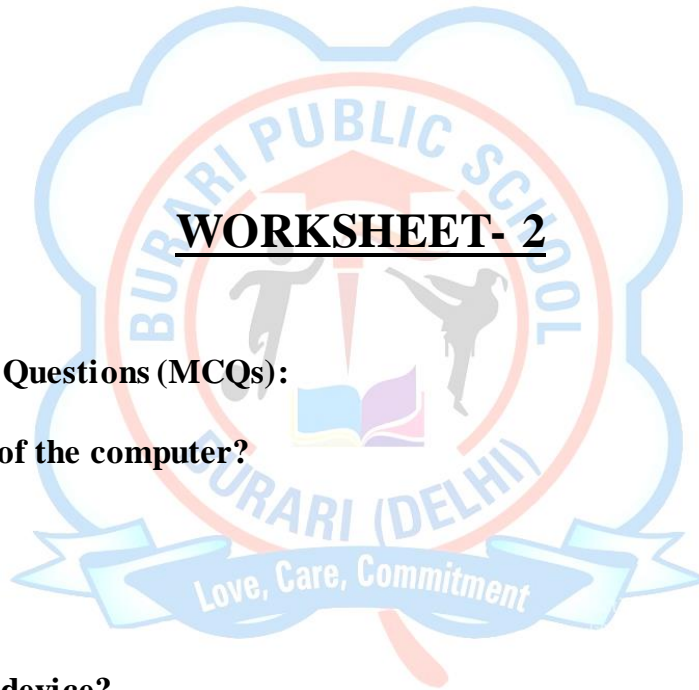
**Q 4 )Match the Following:**

**Column A**

- a. RAM
- b. ROM
- c. Hard Disk
- d. Bit

**Column B**

- i. Permanent memory
- ii. Temporary memory
- iii. Secondary storage
- iv. Smallest unit



**WORKSHEET- 2**

**Q1. Multiple Choice Questions (MCQs):**

**1. What is the brain of the computer?**

- a) Monitor
- b) Keyboard
- c) CPU
- d) Mouse

**2. Which is an input device?**

- a) Printer
- b) Mouse
- c) Monitor
- d) Speaker

**3. Which software is used for typing documents?**

- a) Microsoft Word
- b) Microsoft Paint
- c) Calculator
- d) Notepad++

**4. What does RAM stand for?**

- a) Read Access Memory

- b) Random Access Memory
- c) Run Access Memory
- d) Read Active Memory

**5. Which is a web browser?**

- a) Google Chrome
- b) Keyboard
- c) Printer
- d) CPU

**Q 2. Fill in the blanks taking help from the given options:**

**(Monitor , Central Processing Unit , Keyboard , RAM ,Folder)**

1. The \_\_\_\_\_ is used to display output.
2. The full form of CPU is \_\_\_\_\_.
3. \_\_\_\_\_ is an input device used to type letters.
4. \_\_\_\_\_ is temporary memory.
5. A \_\_\_\_\_ is used to store files and folders.

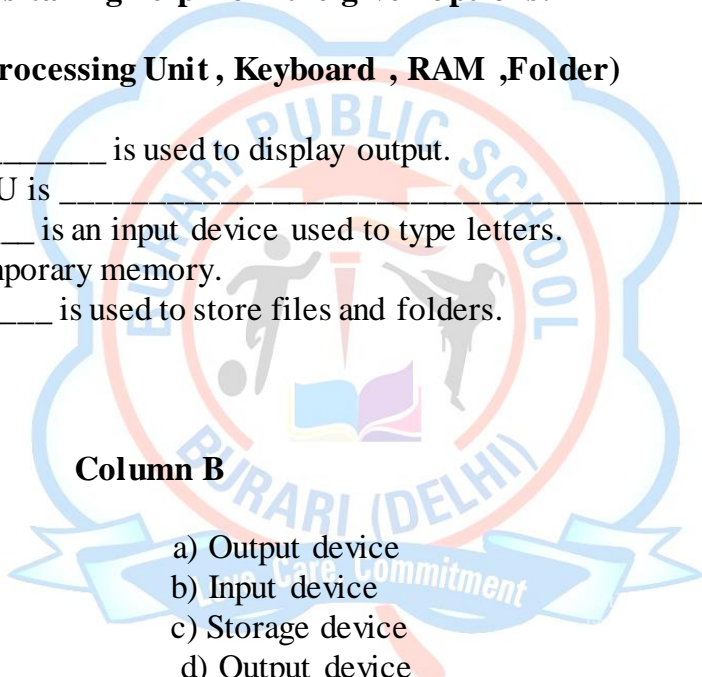
**Q3. Matching:**

**Column A**

- 1. Keyboard
- 2. Monitor
- 3. Printer
- 4. Hard Disk

**Column B**

- a) Output device
- b) Input device
- c) Storage device
- d) Output device



# GENERAL KNOWLEDGE

- **ACTIVITY 1**

- ✓ **About My Country**

Write 5 facts about India

Draw or paste pictures of:

- The National flag
- The National animal (Tiger)
- The National bird (Peacock)

(use an A-4 size sheet)

- **ACTIVITY 2**

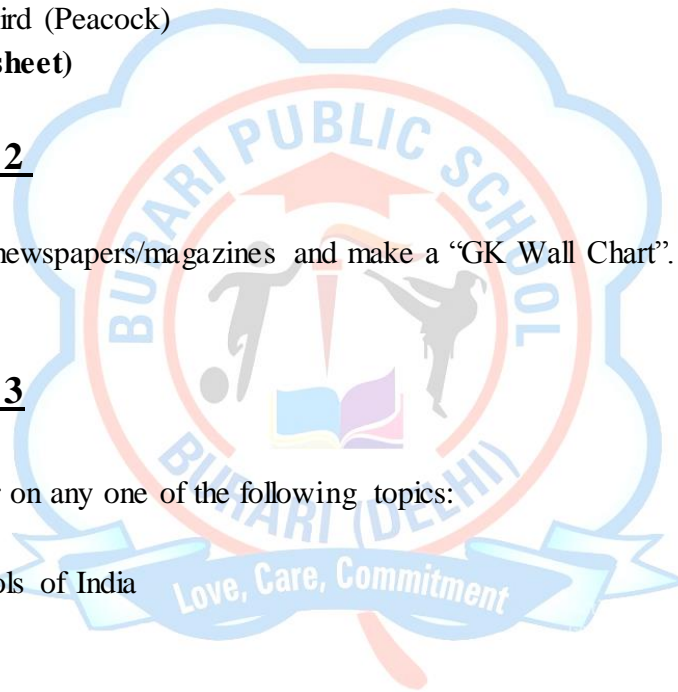
Collect pictures from newspapers/magazines and make a “GK Wall Chart”. (Use A3 size sheet)

- **ACTIVITY 3**

Make a colorful poster on any one of the following topics:

- National symbols of India
- Save Animals
- Clean Earth

**Draw it on A4 size sheet.**



## WORKSHEET -1

### A. Fill in the blanks:

1. The capital of India is \_\_\_\_\_.
2. The national animal of India is \_\_\_\_\_.
3. There are \_\_ continents in the world.
4. The largest ocean is the \_\_\_\_\_.

### B. Multiple Choice Questions (MCQs)

#### 1. Which planet is known as the Red Planet?

- a) Earth
- b) Mars
- c) Jupiter

#### 2. Who is known as the Father of the Nation (India)?

- a) Jawaharlal Nehru
- b) Mahatma Gandhi
- c) Subhash Chandra Bose

#### 3. Which is the largest animal?

- a) Elephant
- b) Blue Whale
- c) Giraffe

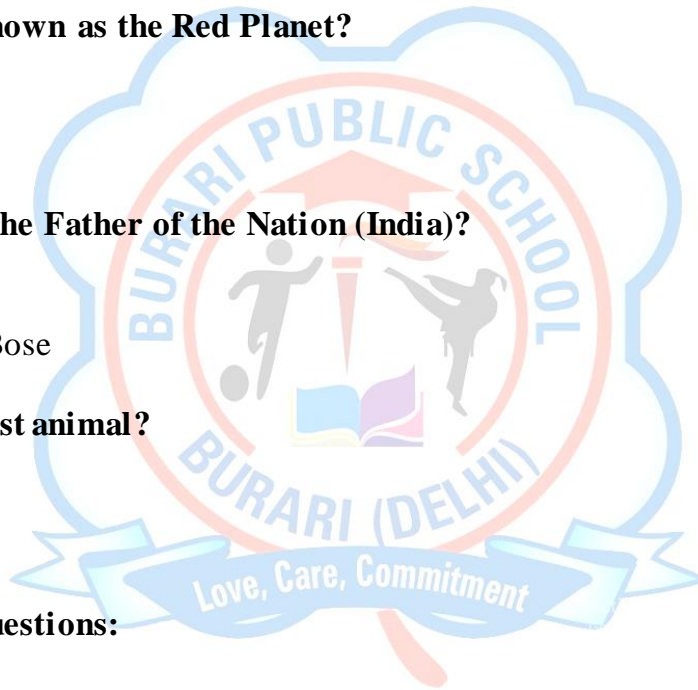
### C. Answer the questions:

1. Name any two festivals of India.
- 

2. What is the national bird of India?
- 

### D. True or False:

1. The Sun rises in the west. (True / False)
2. Water is essential for life. (True / False )



## WORKSHEET - 2

### A. Answer the following:

1. How many states are there in India? \_\_\_
2. Which is the fastest land animal? \_\_\_

### B. Fill in the blanks:

1. The Earth moves around the \_\_\_\_\_.
2. There are \_\_\_ months in a year.

### C. MCQs

#### 1. Which is a water animal?

- a) Tiger
- b) Dolphin
- c) Dog

#### 2. Which festival is called the festival of lights?

- a) Holi
- b) Diwali
- c) Eid

### D. Activity

Draw your favorite festival

### E. Short Answer

1. Name any two indoor games.
- 

2. Why should we save trees?
- 

### D. True/False

1. Air is invisible. (True / False)
2. We should keep our surroundings dirty. (True / False)



# MORAL MINDS

## • TASK 1 - ROLE PLAY AT HOME

### ✓ WHAT YOU HAVE TO DO

Act out the following action:

- \* Helping your parents
- \* Respecting elders
- \* Sharing with siblings or friends
- \* Saying “Thank You” or “Sorry”
- \* Helping a friend or family member
- \* Keeping your room clean
- \* Speaking politely

### ✓ STEPS

1. Perform the action at home (help, speak politely, etc.)
2. Click a picture while doing it ☐
3. Paste the picture on an A4 sheet
4. Write 3–4 lines below the picture:

### ✓ What you did and how you felt

#### EXAMPLE

“I helped my mother in cleaning. She was happy and I felt proud.”

## • TASK 2 - MY KINDNESS BADGE COLLECTION

### ✓ Make 5 different paper badges:

- \* Helping Hero
- \* Smile Spreader
- \* Sharing Star
- \* Respect Ranger
- \* Calm Listener

- Gift one badge each to family members who show kindness. Paste these badges on A - 4 size sheet also as a reference.

## • TASK – 3, CARE FOR LIVING BEINGS

- \* Feed birds/animals or water plants etc.
- \* Click your pictures and make a collage on A – 4 size sheet.

## • TASK – 4, MY HAPPINESS LIST

Task: Write/draw 10 things (Use A – 4 size sheet) that make you happy (non-material).  
You can add pictures to make it more attractive.

Example:

- \* Playing with friends
- \* Spending time with family

# DRAWING

- **Drawing book: complete pages 17, 27 and 41 in book.**

## **Craft work**

Ice Cream Stick Photo Frame Activity

Dear Students,

Get ready for a fun and creative activity!

You will make a beautiful Photo Frame using ice cream sticks.

✓ **What to do:** Create your own small photo frame and decorate it in a creative way.

✓ **Materials Required:**

Ice cream sticks

Glue

Decoration items (colors, beads, glitter, stickers, etc.)

✓ **Instructions :**

Arrange the sticks to form the shape of a frame.

Secure them firmly using glue.

Decorate your frame neatly and creatively.

You may paste your photo or draw a picture inside the frame.

✓ **Remember:**

Keep your work neat and colorful.

Use your imagination and be creative!

