



BURARI PUBLIC SCHOOL

a Venture with **UNIQUE**

PERIODIC TEST – IV

SUBJECT- MATHS

CLASS – I

Name: Roll no.....Date:T. sign.....


Q1. Fill in the blanks.

(5marks)

1. A die looks like a _____.

2. 1 metre = _____ centimetres.

3. Standard unit of measuring length is _____.


4.  is called a _____.

5. The sun looks like a _____.

Q2. Match the following:

(3 marks)

Rectangle



Circle


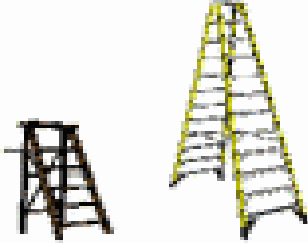






Square



Q3. Look at the pictures in the boxes. Tick the correct one.

(6marks)

<p>Which is taller?</p> 	<p>Which is shorter?</p> 
<p>Which is shorter?</p> 	<p>Which is taller?</p> 
<p>Which is taller?</p> 	<p>Which is shorter?</p> 

Q4. Write the table of 8.

(4marks)

$8 \times 1 =$

Q5. Write in Roman Numerals.

(2marks)

a. 14 - _____

b. 8 - _____

c. 5 - _____

d. 12 - _____