



BURARI PUBLIC SCHOOL

a venture with **UNIQUE**



NAME :

CLASS :

ROLL NO. :

BURARI PUBLIC SCHOOL

a venture with **UNIQUE**

SUMMER HOLIDAY HOMEWORK (2024-25)

Class V

Dear children,

- You matter us most and we All Miss You!
- Stay safe
- Be kind to your family.
- Get creative

Summer vacations are at our doorsteps. Holidays are a well deserved opportunity to relax and unwind by indulging in activities that are pleasurable at the same educative. You are going to enjoy your holidays. It's a sincere request to all to complete holiday projects and home assignment on time. Engage yourself whole heartedly as you will learn a lot through it. Practice your hobbies or inculcate new hobbies. Do a lot of reading it can be newspapers, magazines, books or novels. Watch English news daily in order to equip yourself with the information and facts to be used as content in the writing skills.

Summer Holiday Homework is an initiative on our part, to inculcate innovativeness.

Creativity and interest in the tasks assigned to our students. It will not only enable them to recapitulate what was taught but will also help them to connect themselves to the various learning processes. Kindly ensure that your child complete the assignment neatly.

General Instructions

- All the work should be hand-written.
- Original drawings/illustrations and creative use of material will be appreciated.
- Present your work on A4 size sheet and put it in an attractive folder with your name and class clearly written at the top.

English

❖ Here's a Project for you based on your English I book on page number 61.

The world is filled with many different animals and you are about to go on a journey of discovery and research!

- Each student will be responsible for doing research on one animal and presenting the information in an interesting manner.

First you need to choose an animal.

Go to the library and find a book on animals.

After choosing the book, you need to start the research. There are five questions you need to answer about your animal.

- Page 1 – Introduction
- Page 2- Acknowledgment
- Page 3- Index
- Page 4- What does it look like?
- Page 5- What does it eat?
- Page 6- Where does it live?
- How does it protect itself?
- Page 7- How does it raise its babies?
- Any other interesting facts.
- Page 8- Bibliography
- For making this project you have to use A-4 size colourful or printed sheets.
- Your handwriting must be neat and clean.
- Paste pictures related to the topic.
- Put it in a file and cover it beautifully.

(Project work contains 5 marks)

Writing Skills

- Do the following **unsolved comprehension passages** in your writing skills' book :
 - -The Patient Cat
 - -The Lamplighter
 - -The Skipping Shoes
 - -A Good Rule
- Do **paragraph-I,II & III** given on page no. 52, 53 and 54 of your writing skills' book.
- Complete 20 pages in your cursive writing book.
- Learn all exercises of '**Degrees of Comparison**' given on page no. 48, 49, 50 and 51 in '**STEP AHEAD**' grammar book.

- Do the following topics in Writing Skills Book:

Ch-1 Comprehension

Pg-20 Woodman Spare that Tree!

Pg-23 Thomas Alva Edison

Pg-25 The Great Feast

Ch-2 Writing Steps

Pg-33 Making a Pencil Stand

Pg-34 Making Sprouted gram seeds chaat.

WORKSHEET

A. Make questions for the answers given below.

- a) Yes, I do have a pen. _____.
- b) I work in Patna. _____.
- c) My brother is better now. _____.
- d) This is my new pencil box. _____.
- e) My birthday is in June. _____.

B. Identify the subject and the predicate. Circle the subject and underline the predicate.

- a) At the corner of the hall stood Ramu.
- b) Rose was a princess who slept for a hundred years.
- c) The King offered his advice to the farmer.
- d) The lion wanted to eat the rabbit.
- e) He manages to reach home on time.

C. Circle the proper nouns and underline the proper nouns:

- a) Mother washed Ritu's clothes in the washing machine.
- b) The poem 'Ode to Autumn' was written by John Keats.
- c) The capital of Nepal is Kathmandu
- d) Rajiv and Priyanka are brother and sister
- e) Teachers and students worked together for the exhibition.

D. Rewrite the following sentences using the right words:

- a) Her (grandfather, grandmother) took out his shawl from the cupboard.
- b) (Father, Mother) lost his bag in the train.
- c) The (man, women) felt the loss of her dear husband.
- d) The (girl, boy) saved her brother from falling down.
- e) His (daughter-in-law, son-in-law) was wearing a beautiful sari.

E. Write the plural form the following:

- a) goose
- b) jeans
- c) furniture
- d) cattle
- e) man- servant
- f) Cactus
- g) Sheep
- h) Paper
- i) Dozen
- j) Diary

F. Use the correct plural form of nouns to fill in the blanks:

- a. The news _____ disheartening. (is, are)
- b. The police _____ chasing the thieves. (are, is)
- c. The scissors _____ kept in the drawer. (is, are)
- d. The trousers _____ washed and ironed. (is, are)
- e. Wood _____ generally used to make strong doors. (is, are)
- f. The furniture _____ kept in the adjacent room. (is, are)
- g. The diagnoses _____ not correct. (is, are)
- h. Two t's _____ added to other letters to form the word abstract. (is, are)

G. Write an essay on the topics:

- a) A day in the life of a student
- b) Women Empowerment
- c) Corruption

हिंदी

- सुलेखन पुस्तक में पृष्ठ संख्या २१ से लेकर ४० तक पूरा करें ।
- १ से १०० तक गिनती लिखे व याद करें ।(गृह कार्य नोटबुक)
- निम्नलिखित में से किन्हीं दो विषयों पर अनुच्छेद ६० से ८० शब्दों में लिखे । (गृह कार्य नोटबुक)
 - महात्मा गांधी
 - मेरा प्रिय त्योहार
 - व्यायाम का महत्व
 - समय का सदुपयोग
- किन्हीं पाँच स्वतंत्रता सेनानियों का सचित्र परिचय दीजिए। (A4 साइज शीट)

कार्यपत्रिका

प्रश्न-१ दिए गए चित्र को ध्यान से देखिए और इससे संबंधित वाक्य लिखें ।



प्रश्न-2 नीचे दिए गए गद्यांश को पढ़कर निम्न प्रश्नों के उत्तर दो-

किसी तालाब में एक बातूनी कछुआ रहता था। उसी तालाब के किनारे दो हंस भी रहते थे। वे तीनों आपस में मित्र थे। एक बार गरमी के मौसम में तालाब का पानी सूखने के कारण हंस दूसरे तालाब पर उड़कर जाने के लिए तैयार हो गए। कछुआ भी तैयार था, लेकिन उसे ले जाने की समस्या थी। कछुए ने उपाय बताया कि दोनों हंस अपनी चोंच में एक लकड़ी के सिरो को पकड़ लेंगे और वह उस लकड़ी को अपने मुँह से पकड़ लेगा, जिससे तीनों मित्र एक साथ एक ही तालाब पर रहेंगे। हंसों ने कहा कि उपाय तो अच्छा है, लेकिन बातूनी होने के कारण तुम रास्ते में बात न करने लगना नहीं तो तुम नीचे गिरकर मर जाओगे। कछुए ने कहा कि वह मूर्ख नहीं है वह अपने पैर पर स्वयं कुल्हाड़ी क्यों मारेगा? योजनानुसार वे उड़ गए। रास्ते में कुछ लोगों की बात सुनकर कछुआ बोल पड़ा और नीचे गिरकर अपनी जान खो बैठा। हमें कभी भी फालतू बातों में न पड़कर अपने लक्ष्य की तरफ ही ध्यान देना चाहिए -

1. तीन मित्र कौन-कौन थे?

(क) दो हंस एक कछुआ (ख) कछुआ और (ग) एक हंस

2. किसे दूसरे तालाब में जाने की समस्या थी?

(क) हंसों को (ख) कछुए को (ग) लोगों को

3. तालाब सूख गया, क्योंकि:

(क) बहुत गरमी थी (ख) बहुत सरदी थी (ग) बहुत वर्षा थी

4. हंसों ने कहा कि उपाय तो अच्छा है, पर:

(क) तुम बातूनी होने के कारण रास्ते में बात नहीं करना
(ख) तुम चालाक होने के कारण रास्ते में बात नहीं करना
(ग) तुम मूर्ख होने के कारण रास्ते में बात नहीं करना

5. अपने पैर पर स्वयं कुल्हाड़ी मारने का अर्थ है:

(क) अपना नुकसान स्वयं करना

(ख) अपना फायदा करना

(ग) अपना कार्य स्वयं करना

प्रश्न ३. दिए गए मूल शब्द में उचित उपसर्ग लगाकर शब्द बनाएं ।

प्रति अध परा खुश स्व अव उप अप

अभि हम पुनः चिर नि गैर सह

उचित उपसर्ग जोड़ें -

उपसर्ग	मूल शब्द
	पाठी
	मान
	शेष
	काल
	जय
	कूल
	कानूनी
	देश
	खिला
	शक्ल
	हत्था
	नसीब
	कार
	जन्म
	लाषा

प्रश्न ४. वर्ण विच्छेद करो -

1. ज्ञानी=.....
2. अँगना=
3. अपर्णा =
4. इंदु =.....
5. संसार=.....
6. स्वादिष्ट =
7. श्रीमान=
8. क्षत्रिय=.....
9. ऋषि =
10. ऐनक =
11. औरत =
12. कृपा =.....
13. खंड =.....
14. चंडी=.....
15. झगड़ा =

प्रश्न ५. तद्भव रूप लिखो -

सूर्य	कर्म
अग्नि	दुग्ध
रात्री	मधु

प्रश्न ६. निम्नलिखित शब्द किस भाषा से आए हैं -

किताब	डॉक्टर
गुब्बारा	आलपीन
कैंची	साबुन

प्रश्न ७. निम्नलिखित शब्द रूढ़ है, योगरूढ़ है अथवा यौगिक ?

किताब	पीतांबर
पंकज	पाठशाला
नीलकमल	पुस्तकालय

Maths

- Prepare a model of different types of angles using ice cream sticks. Use full size pastel sheet for this activity. [Refer Ch-14 Geometry Pg-148]
- Make your own table book. Write Tables 1 to 30 on A4 size colored sheets. Staple all the sheets together to make your Table Book.

Write Tables in the following manner:

$1 \times 1 = 1$

$2 \times 1 = 2$

$1 \times 2 = 2$

$2 \times 2 = 4$

....so on

(Write two tables on one sheet.)

- Do the following worksheets.

WORKSHEET

Q-III Write True or False.

- 1) The place value of the digit 5 in 26,59,360 is ten thousand ().
- 2) 29,934 rounded to the nearest thousand is 30,934 ().
- 3) XLIV represents 64 ().
- 4) The Roman numeral for 40 is XXXX ().
- 5) V and L are never repeated ().
- 6) The digit 9 in 4,93,608 is in ten thousands period ()

Q-IV Answer the following:

- 1) Write the numeral for the following:
 - a) Seven crore two hundred fourteen _____
 - b) Three million seven thousand and nine _____
 - c) $4,000,000 + 70,000 + 200 + 5$ _____
- 2) Put commas according to the Indian system and write the number in words and expanded form. 65700429
In words: _____

In expanded forms: _____
- 3) Put commas according to International system and write the number in words
7003246
In words: _____
- 4) Make the smallest and greatest 8 digit number using 7, 2, 6, 0, 9, 3

Smallest _____
Greatest _____
- 5) Round the numbers.
 - a) 135,296 to the nearest 10 _____
 - b) 350,678 to the nearest 100 _____
 - c) 735,219 to the nearest 1000 _____

6) Give the place and place value of the circled digit.

Numeral	Place	Place value
a) 19,34,065		
b) 6,472,105		

7) Write the Roman numeral for:

87 = _____ 46 = _____ 19 = _____ 93 = _____

8) Solve

a) XCII - LXIV =

b) XLVII + XXVI =

9) Write the Hindu-Arabic numeral for:

a) C _____ (b) D _____ c) LXXV _____ d) LXIX _____

Challenging questions

1) In a 6 digit number

- Ones digit is 2
- Tens digit is 3 times ones digit
- Hundreds digit is 5 less than tens digit
- Thousands digit is sum of ones tens and hundreds digits
- Ten thousands digit is half of tens digit
- Lakhs digit is difference of thousands and ten thousands digits

Find the number?

2) The greatest and smallest 7 digit number formed using different digits:

greatest =

Smallest =

MULTIPLICATION – 2 DIGITS BY 2 DIGITS

SHEET 1

Multiply a 2 digit number by a 2 digit number.

$$\begin{array}{r} 1) \quad 27 \\ \times 16 \\ \hline \end{array}$$

$$\begin{array}{r} 2) \quad 45 \\ \times 12 \\ \hline \end{array}$$

$$\begin{array}{r} 3) \quad 35 \\ \times 18 \\ \hline \end{array}$$

$$\begin{array}{r} 4) \quad 31 \\ \times 23 \\ \hline \end{array}$$

$$\begin{array}{r} 5) \quad 35 \\ \times 21 \\ \hline \end{array}$$

$$\begin{array}{r} 6) \quad 56 \\ \times 14 \\ \hline \end{array}$$

$$\begin{array}{r} 7) \quad 31 \\ \times 18 \\ \hline \end{array}$$

$$\begin{array}{r} 8) \quad 56 \\ \times 15 \\ \hline \end{array}$$

$$\begin{array}{r} 9) \quad 39 \\ \times 24 \\ \hline \end{array}$$

$$\begin{array}{r} 10) \quad 17 \\ \times 32 \\ \hline \end{array}$$

$$\begin{array}{r} 11) \quad 24 \\ \times 33 \\ \hline \end{array}$$

$$\begin{array}{r} 12) \quad 33 \\ \times 25 \\ \hline \end{array}$$

$$\begin{array}{r} 243118 \\ + 612741 \\ \hline \end{array}$$

$$\begin{array}{r} 854167 \\ - 481959 \\ \hline \end{array}$$

$$\begin{array}{r} 931897 \\ - 495704 \\ \hline \end{array}$$

$$\begin{array}{r} 601550 \\ + 424316 \\ \hline \end{array}$$

$$\begin{array}{r} 346583 \\ + 431473 \\ \hline \end{array}$$

$$\begin{array}{r} 750092 \\ + 332250 \\ \hline \end{array}$$

$$\begin{array}{r} 141321 \\ + 311606 \\ \hline \end{array}$$

$$\begin{array}{r} 614412 \\ + 489361 \\ \hline \end{array}$$

$$\begin{array}{r} 935527 \\ - 327662 \\ \hline \end{array}$$

$$\begin{array}{r} 290418 \\ - 273475 \\ \hline \end{array}$$

$$\begin{array}{r} 864710 \\ + 522211 \\ \hline \end{array}$$

$$\begin{array}{r} 854365 \\ - 541912 \\ \hline \end{array}$$

$$\begin{array}{r} 909646 \\ + 812862 \\ \hline \end{array}$$

$$\begin{array}{r} 662380 \\ + 214654 \\ \hline \end{array}$$

$$\begin{array}{r} 324770 \\ + 984646 \\ \hline \end{array}$$

$$\begin{array}{r} 848118 \\ - 720003 \\ \hline \end{array}$$

$$\begin{array}{r} 425507 \\ - 351372 \\ \hline \end{array}$$

$$\begin{array}{r} 156221 \\ - 128386 \\ \hline \end{array}$$

$$\begin{array}{r} 937401 \\ - 526304 \\ \hline \end{array}$$

$$\begin{array}{r} 872171 \\ - 215850 \\ \hline \end{array}$$

Place Value

Name _____ Date _____

Write the number using the expanded form

Example: $800 + 40 + 9 = \boxed{849}$

1) $700 + 50 + 8 = \boxed{}$

2) $100 + 60 + 2 = \boxed{}$

3) $400 + 90 + = \boxed{}$

4) $80 + 5 = \boxed{}$

5) $900 + 70 + 7 = \boxed{}$

6) $800 + 30 + 4 = \boxed{}$

7) $500 + 3 = \boxed{}$

8) $600 + 10 + 3 = \boxed{}$

Write the correct number in the box

Example: $475 = 400 + \boxed{70} + 5$

9) $573 = 500 + \boxed{} + 3$

10) $826 = \boxed{} + 20 + 6$

11) $219 = 200 + 10 + \boxed{}$

12) $357 = 300 + 50 + \boxed{}$

12) $702 = 700 + \boxed{} + 2$

14) $499 = 400 + \boxed{} + 9$

Fill in the correct digit for each place value

Example: $348 = \underline{3}$ hundreds + $\underline{4}$ tens + $\underline{8}$ ones

15) $819 = \underline{}$ hundreds + $\underline{}$ tens + $\underline{}$ ones

16) $407 = \underline{}$ hundreds + $\underline{}$ tens + $\underline{}$ ones

17) $539 = \underline{}$ hundreds + $\underline{}$ tens + $\underline{}$ ones

18) $721 = \underline{}$ hundreds + $\underline{}$ tens + $\underline{}$ ones

DIVISION – 3 DIGITS BY 2 DIGITS SHEET 1

Divide these 3 digit numbers by a 2 digit number with no remainders.

$$1) \quad 14 \overline{) 364} \quad 2) \quad 21 \overline{) 357} \quad 3) \quad 33 \overline{) 627}$$

$$4) \quad 25 \overline{) 625} \quad 5) \quad 17 \overline{) 510} \quad 6) \quad 24 \overline{) 816}$$

$$7) \quad 42 \overline{) 588} \quad 8) \quad 34 \overline{) 170} \quad 9) \quad 18 \overline{) 324}$$

$$10) \quad 54 \overline{) 324} \quad 11) \quad 24 \overline{) 672} \quad 12) \quad 31 \overline{) 682}$$

Science

Activity

- Make a model of **human skeleton** labelling .
 - Skull
 - Ribcage
 - Backbone and
 - Limbs

(Do it on a black A-3 drawing sheet).

- Make an attractive chart on **Steps of Agriculture for Crop Production**. Paste the related pictures and write one lines for each of the steps. (Do it on A-3 size sheet).
- Loud sound can damage our ears and lead to hearing loss. We should avoid noise and sound pollution. **Make a poster to create awareness about the same.**
- Read chapter 5 **Organisms and their Interdependence** and do the book exercise.
- Learn To Do Surya Namaskar.**
 - Stand facing the rising sun early in the morning. Your feet placed together and hands in Namaskar Mudra. Close your eyes.
 - Slowly, inhale and exhale for a few seconds. Meditate on the rising Sun. Visualise the sunlight radiating through your whole body. **(Do it on a daily basis)**

Project

Follow the standards of CBSE while making your project work.


- Your best activity out of the three will be considered as your project work.


(Your Project should contain a detailed information about the topic and related model/ pictures should be there.)


I. Complete the following table:

Consumer	Consumer Type
i. Goat	<input type="text"/>
ii. Lion	<input type="text"/>
iii. Bear	<input type="text"/>
iv. Horse	<input type="text"/>

II. Choose the correct option by observing the picture given below:


i. A food chain always begins from a .


ii. The living organisms that produce their own food are called .


iii. All the food chains are to each other.

iv. Absence of any living organism upsets the in nature.

III. Identify the pictures given and choose the correct option to maintain balance in nature:







Social Science

- How well do you know your country? Name the following and paste pictures. Also write a few lines on each of them. (Do in scrapbook)

i) National Flag

ii) National Emblem

iii) National Animal

iv) National Bird

v) National Anthem

vi) National Game

vii) National Flower

viii) National Fruit

ix) National Currency

- Take a political map of India and mark all the 28 States and 8 Union Territories in it. Learn the capitals of all the States and Union Territories. (Map Work)

PROJECT

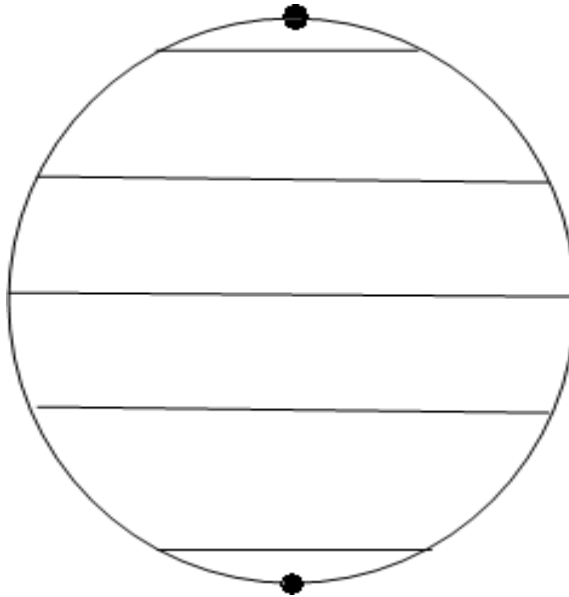
- Make your own weather wheel with waste material.



WORKSHEET

Parallels of the Earth

A. Mark and name the important parallels shown on the figure and number them correctly.



B. Use an atlas to find out the states of India through which the Tropic of Cancer passes. (The first letter of each state name is given to help you.)

1. G _____

5. R _____

2. M _____

6. W _____

3. J _____

7. T _____

4. C _____

8. M _____

Weather and Climate

A. Choose the correct option and circle it:

1. The condition of atmosphere at a particular time and place is called

- a. weather b. season c. wind d. humidity

2. The region that lies between the Tropics is known as

- a. frigid zone b. temperate zone c. torrid zone d. none of these

3. The type of climate found in Greenland is

- a. hot and wet b. cool and dry c. Mediterranean d. very cold

4. The amount of water vapour in the air is known as

- a. rainfall b. humidity c. weather d. climate

5. The climate in the Temperate zone is

- a. cold b. hot c. wet d. moderate

B. The table given below shows the maximum and minimum temperatures in four Indian cities in January and June. Study it and answer the questions.

	Delhi	Mumbai	Kolkata	Chennai
January	15 ⁰ C	21 ⁰ C	20 ⁰ C	23 ⁰ C
June	42 ⁰ C	37 ⁰ C	36 ⁰ C	38 ⁰ C
Difference				

a. Which city is hottest in summer?

b. Which city is coldest in winter?

c. What is the difference between the summer and winter temperatures in these four cities?

Write your answers in the empty spaces in the table.

General Knowledge

□ Choose any three famous landmarks (e.g., The Eiffel Tower, The Great Wall of China, The Pyramids of Giza).(A4 size sheets)

- ❖ Find out where they are located, who built them, and any interesting facts.
- ❖ Draw a picture of each landmark and write a short paragraph about each one.

• Write details about these personality and paste their pictures.((A4 size sheets)

- Sudha Murthy
- Neeraj Chopra

□ Choose a book about famous scientists, explorers, or historical figures (e.g., "Who Was Albert Einstein?" or "The Story of My Life by Helen Keller"). (A4 size sheets)

- ❖ Write a short summary (one page) of the book.
- ❖ Mention three interesting facts you learned.

WORKSHEET

1. What is the capital city of France?

- a) Madrid
- b) Rome
- c) Paris
- d) Berlin

2. Which continent is known as the 'Dark Continent'?

- a) Asia
- b) Africa
- c) Europe
- d) Australia

3. Which ocean is the largest?

- a) Atlantic Ocean
- b) Indian Ocean
- c) Arctic Ocean
- d) Pacific Ocean

4. In which year did the Titanic sink?

- a) 1905
- b) 1912
- c) 1920
- d) 1931

5. Who was the famous queen of Ancient Egypt?

- a) Cleopatra
- b) Nefertiti
- c) Hatshepsut
- d) Sobekneferu

6. Which planet is known as the 'Red Planet'?

- a) Venus
- b) Mars
- c) Jupiter
- d) Saturn

7. What is the boiling point of water?

- a) 50°C
- b) 100°C
- c) 150°C
- d) 200°C

8. Which is the largest land animal?

- a) Elephant
- b) Rhino

c) Hippo

d) Giraffe

9. Which instrument is used to measure temperature?

a) Barometer

b) Thermometer

c) Hygrometer

d) Anemometer

10. How many continents are there in the world?

a) 5

b) 6

c) 7

d) 8

Moral Mind

- 1.** Share an experience you had when you were greedy. what was the result?
- 2.** Backbiting is apparently not physically harmful then why should we not do it?
- 3.** Make a poster on being thoughtful and considerate. Display it on the bulletin board.
- 4.** Write down four quotes on friendship. Write down the name the person who wrote the quote.
- 5.** Write down three duties which every person should perform for those in trouble.

Computer

- Draw a computer system and label its main parts: monitor, CPU, keyboard, mouse, and speakers.
Write a short paragraph explaining the function of each part.

- Typing Practice: Spend 20 minutes each day practicing typing using an online typing tutor (e.g., Typing Club, Nitro Type).

At the end of the holiday, write a paragraph about your favorite holiday activity using your improved typing skills.

WORKSHEET

Identify the type of computer and correctly state the name in the blank space provided.

Draw a line to match the words and the pictures that show what you can do using a computer.

1. Watch a movie



2. Talk to father



3. Read new words



4. Play a game



5. Send a message



T. Lucina Ruelan-Tiu

Match the types of Operating system

A



B

Windows

Linux

Apple

Android


Ubuntu

Q1. Identify the pictures given below and type the correct answer in the callouts with the use of help box:









Q2. Look at the icons given below and type the correct answer to complete the table with the help box.

Notepad, .pptx, MS Excel, .txt, MS. Word, .xlsx, MS PowerPoint, .docx

Icons	Name of the Program	File extension used

Drawing

Pg-16 Geometric Painting (Do in drawing file)

Pg-18 Matchstick Art (Do in Art Festival Book)

Pg-24 Dabbling Duck (Do in Art Festival Book)

Pg-26 Lord Ganesha (Do in Art Festival Book)

Activity : Pen Stand

*Make a pen stand using cardboard box and paint madhubani art.

Material Required

1. Small cardboard box
2. Tissue Paper
3. Fevicol
4. Masking Tap
5. Acrylic Colors
6. Markers

Reference Link for Pen Stand

<https://youtu.be/PKMLEhBAVHY?si=vbqiDz8ZP4wL5wXR>