



BURARI PUBLIC SCHOOL

a venture with **UNIQUE**



NAME :

CLASS :

ROLL NO. :



BURARI PUBLIC SCHOOL

a venture with **UNIQUE**

Class III

SUMMER HOLIDAY HOMEWORK 2024 – 25

Dear children,

- **You matter us most and we All Miss You!**
- **Stay safe**
- **Be kind to your family.**
- **Get creative**

Summer vacations are at our doorsteps. Holidays are a well deserved opportunity to relax and rewind by indulging in activities that are pleasurable at the same educative. You are going to enjoy your holidays. It's a sincere request to all to complete holiday projects and home assignment on time. Engage yourself whole heartedly as you will learn a lot through it. Practice your hobbies or inculcate new hobbies. Do a lot of reading can be newspapers, magazines, books or novels. Watch English news daily in order to equip yourself with the information and facts to be used as content in the writing skills.

Summer Holiday Homework is an initiative on our part, to inculcate innovativeness.

Creativity and interest in the tasks assigned to our students. It will not only enable them to recapitulate what was taught but will also help them to connect themselves to the various learning processes. Kindly ensure that your child complete the assignment neatly.

General Instructions

- All the work should be hand-written.

- Original drawings/ illustrations and creative use of material will be appreciated.
- Present your work on A-4 size sheets and put it in an attractive folder with your name and class clearly written at the top.

English

1. Here's a Project for you based on your English I book Lesson- 6 Healthy food.

- Page 1 – Introduction
- Page 2- Acknowledgment
- Page 3- Index
- Page 4- What is food?
- Page 5- What is a balance diet?
- Page 6- What are the main difference between junk food and healthy food?
- How does consuming junk food regularly impact our health compared to eating a balance diet of healthy food?
- Page 7- What are some common examples of junk food and healthy food, and what makes them fall into each category?
- How can individuals make healthier food choices in their daily lives to promote overall well-being?
- Page 8- Bibliography
- For making this project you have to use A-4 size colourful or printed sheets.
- Your handwriting must be neat and clean.
- Paste pictures related to the topic.
- Put it in a file and cover it beautifully.

(Project work contains 5 marks)

WORKSHEET

A. Rearrange the words to make sensible sentences.

a. Atul jijya cousins are and

b. Monkey molly high jumped

c. Loudly the clapped audience

d. John big mr has a car

e. All work time chetan his does on

B. Underline the subject and circle the predicate in each sentences below:

- a. My shirt is blue.
- b. Mary had a little lamp.
- c. The weather is hot today.
- d. Bobby climbed the tree.
- e. The grass is green.
- f. Fish lives in water.
- g. The teacher wrote on class board.
- h. The zookeeper fed all the animals.
- i. The school van came late.
- j. Dinosaurs are now extinct.

C. Fill in the blanks with suitable predicates:

- a. _____ is a holiday.
- b. _____ is a warm city.
- c. _____ was fantastic.
- d. _____ is a lovely place.
- e. _____ keeps charming.
- f. _____ plays badminton.
- g. _____ was my best friend.

D. Fill in the blanks with the names of the persons who do these things:

- a. A person who bakes cakes. _____
- b. A person who lays bricks. _____
- c. A person who writes books. _____
- d. A person sells medicines. _____
- e. A person who goes into space. _____
- f. A person who stitches clothes. _____
- g. A person who fixes or repairs leaking tape. _____

E. Fill in the blanks with the names of places:

- a. A place where cars are kept. _____
- b. A place where ships are kept. _____
- c. A place where horses are kept. _____
- d. A place where aircraft are kept. _____
- e. A place where bees are reared for honey. _____

F. Write the following words to plural form:

- a. Shop-
- b. Child –
- c. Bus-
- d. Chief -
- e. Glass-
- f. Setero-

- g. Bench –
h. Bamboo –
i. Cargo-
j. Sky -

G. Rewrite the following sentences by changing the gender of the underlined words:

- a. The lion guarded his cubs.
_____.
- b. The poet composed many poems.
_____.
- c. The host of the party was very courteous.
_____.
- d. The priest at the temple blessed the children.
_____.
- e. The monks and the nuns attended the sermon.
_____.

H. English Comprehension:

Do Lesson- 11 to Lesson- 20

I. Cursive Writing:

Do pg 11 to pg 20

हिंदी

- सुलेखन पुस्तक में पृष्ठ संख्या २१ से लेकर ४० तक पूरा करें ।
- १ से १०० तक गिनती लिखे व याद करें ।(गृह कार्य नोटबुक)
- निम्नलिखित में से किन्हीं दो विषयों पर अनुच्छेद ६० से ७० शब्दों में लिखे । (गृह कार्य नोटबुक)
 - * मेरी प्रिय अध्यापिका
 - * फलों का राजा आम
 - * लाभकारी पशु: गाय
 - * मेरा परिवार
- कविता -३ 'जीवन के खेल' कविता को A4 साइज शीट पर लिखे व याद करें तथा कविता से संबंधित एक सुंदर चित्र बनाएं ।

5. दिए गए चित्र पर आधारित कुछ वाक्य लिखें ।



6. निम्नलिखित गद्यांश को ध्यान से पढ़िए और प्रश्नों के उत्तर लिखिए ।

दो चुहियों थीं। उनके नाम ईनी और मीनी थे। ईनी गाँव में रहती थी जबकि मीनी शहर के एक बड़े घर में रहती थी। ईनी और मीनी अच्छी मित्र थीं। एक दिन मीनी दोपहर के भोजन के लिए ईनी के घर गई। मीनी ने उसके लिए गिरी और फलों का सादा भोजन परोसा । मीनी को यह पसंद नहीं आया और उसने भोजन को देखकर बुरा सा मुँह बनाया। कुछ दिनों बाद मीनी ने ईनी को दोपहर के भोजन के लिए अपने घर बुलाया। जब ईनी उसके घर पहुँची तो उसने मेज़

पर अनेक प्रकार का भोजन सजा हुआ देखा, जैसे केक, पेस्ट्री आदि। ऐसा भोजन देखकर ईनी के मुँह में पानी आ गया। इस पर मीनी बोला, "हमें पहले अपने मालिक का इंतजार कर होगा। जब तक वह भोजन नहीं करता, मैं भी भोजन नहीं करती। उसके बाद हम दोनों भरपेट भोजन करेंगे।" मालिक के खाना खाकर चले जाने के बाद दोनों चुहियाँ मेज पर पहुँची। वे पनीर में अपने दाँत गड़ाने ही वाली थीं कि मीनी को एक आवाज सुनाई दी। वह तुरंत बोली, "जल्दी करो। हमें यहाँ से भाग जाना चाहिए।" वे भागकर अपने बिल में छिप गई। यह आवाज मालिक की पालतू बिल्ली की थी जिसने चुहियों की गंध सूँघ ली थी। इस बात से ईनी इतना डर गई कि उसने अपने घर पहुँचकर ही साँस ली। उसने फैसला किया कि उसका अपना सादा भोजन ही बेहतर है, कम से कम उसके जीवन को कोई खतरा तो नहीं है।

१. इस कहानी में दोनों चुहियों के नाम बताइए?

२. दोनों चुहियाँ कहाँ रहती थीं?

३. ईनी ने क्या परोसा ?

४. मीनी ने ईनी को अपने घर आने का गनमंत्रण क्यों गदया ?

५. दोपहर के भोजन के समय मीनी ने ईनी से क्या कहा ?

प्रश्न 7 निम्नलिखित शब्दों के विलोम शब्द बादलो: -

छोटा	X	_____
दूर	X	_____
नरम	X	_____
सीधा	X	_____
इधर	X	_____
रात	X	_____
सुबह	X	_____

विपरीत शब्द पर गोला लगाओ।

रात -	सुबह	शाम	दिन	कल
नरम -	गरम	शर्म	ठंडा	धुप
छोटा -	बड़ा	खोटा	मोटा	सीधा
ठंडा -	गरम	नरम	पीला	गोरा
मोटा -	छोटा	पतला	हल्का	भरी

प्रश्न 8 निम्नलिखित शब्दों के लिंग बदलो।

क) शेर

ख) हंस

ग) मोर

घ) चोर

ङ) भाई

च) घोडा

छ) बकरा

ज) तोता

झ) माता

MATHS

PROJECT : Make a project on Roman Numerals (1 to 50) using matchsticks.

WORKSHEETS

A. Write the number names for each of the following.

1. 1,320 _____

2. 2,432 _____

3. 4,276 _____

4. 6,107 _____

5. 8,758 _____

6. 5,643 _____

7. 9,999 _____

8. 9,081 _____

B. Write the number for each of the following.

1. One thousand six hundred thirty _____

2. Three thousand one hundred seventy-five _____

3. Five thousand two hundred nine

4. Six thousand seven hundred fifty-two

5. Eight thousand four hundred eighty-six

6. Nine thousand eight hundred sixty-four

7. Two thousand six hundred thirty

8. One thousand five hundred eighteen

B. Write the following numbers in ascending order.

1. 3,180; 3,015; 2,890; 4,858 -

2. 2,890; 3,015; 3,180; 4,858 -

3. 2,451; 1,895; 3,156; 2,962 -

4. 3,175; 1,573; 1,753; 5,713 -

5. 2,416; 1,246; 3,120; 3,692 -

6. 1,743; 4,371; 3,174; 4,713 -

7. 3,581; 1,358; 3,158; 5,813 -

8. 3,216; 2,316; 1,236; 6,312 -

9. 4,165; 1,654; 1,456; 4,651 -

10. 5,144;4,144;2,004;5,459 -

11. 1,492;2,194;1,942;5,841 -

12. 2,856;5,682;2,341;5,142 -

13. 2,416;1,246;3,120;3,692 -

C. Round off the following to nearest tens.

1. 1,824 is nearly equal to _____

2. 3,308 is nearly equal to _____

3. 5,525 is nearly equal to _____

4. A boy has 1,725 paint brushes. The number of brushes rounded off to nearest tens is _____

D. Round off the following to nearest hundreds.

1. 6,131 is nearly equal to _____

2. 7,259 is nearly equal to _____

3. 8,685 is nearly equal to _____

4. A school has 2,385 students. The number of students rounded off to nearest hundreds is _____

E. Round off the following to nearest thousands.

1. 7,295 is nearly equal to _____

2. 4,768 is nearly equal to _____

3. 8,531 is nearly equal to _____

4. A water park was visited by 8,296 people last Sunday. The number of visitors rounded off to nearest thousands is

Addition

$$\begin{array}{r} 368 \\ + 125 \\ \hline \end{array}$$

$$\begin{array}{r} 659 \\ + 254 \\ \hline \end{array}$$

$$\begin{array}{r} 476 \\ + 436 \\ \hline \end{array}$$

$$\begin{array}{r} 524 \\ + 177 \\ \hline \end{array}$$

$$\begin{array}{r} 746 \\ + 705 \\ \hline \end{array}$$

$$\begin{array}{r} 863 \\ + 329 \\ \hline \end{array}$$

$$\begin{array}{r} 625 \\ + 475 \\ \hline \end{array}$$

$$\begin{array}{r} 274 \\ + 135 \\ \hline \end{array}$$

$$\begin{array}{r} 278 \\ + 258 \\ \hline \end{array}$$

$$\begin{array}{r} 389 \\ + 134 \\ \hline \end{array}$$

$$\begin{array}{r} 943 \\ + 182 \\ \hline \end{array}$$

$$\begin{array}{r} 517 \\ + 463 \\ \hline \end{array}$$

$$\begin{array}{r} 592 \\ + 668 \\ \hline \end{array}$$

$$\begin{array}{r} 453 \\ + 885 \\ \hline \end{array}$$

$$\begin{array}{r} 275 \\ + 325 \\ \hline \end{array}$$

$$\begin{array}{r} 784 \\ + 391 \\ \hline \end{array}$$

Subtraction

$$\begin{array}{r} 126 \\ - 31 \\ \hline \end{array}$$

$$\begin{array}{r} 357 \\ - 46 \\ \hline \end{array}$$

$$\begin{array}{r} 248 \\ - 69 \\ \hline \end{array}$$

$$\begin{array}{r} 446 \\ - 48 \\ \hline \end{array}$$

$$\begin{array}{r} 242 \\ - 45 \\ \hline \end{array}$$

$$\begin{array}{r} 548 \\ - 73 \\ \hline \end{array}$$

$$\begin{array}{r} 671 \\ - 86 \\ \hline \end{array}$$

$$\begin{array}{r} 304 \\ - 47 \\ \hline \end{array}$$

$$\begin{array}{r} 650 \\ - 301 \\ \hline \end{array}$$

$$\begin{array}{r} 355 \\ - 175 \\ \hline \end{array}$$

$$\begin{array}{r} 404 \\ - 138 \\ \hline \end{array}$$

$$\begin{array}{r} 372 \\ - 107 \\ \hline \end{array}$$

$$\begin{array}{r} 544 \\ - 239 \\ \hline \end{array}$$

$$\begin{array}{r} 743 \\ - 554 \\ \hline \end{array}$$

$$\begin{array}{r} 416 \\ - 118 \\ \hline \end{array}$$

$$\begin{array}{r} 646 \\ - 350 \\ \hline \end{array}$$

E.V.S

Project:- Make a Project based on Ch-8 'Games We Play'.

Q-A Write five different ways each in which you can save water and electricity at home.

WATER

1. _____.
2. _____.
3. _____.
4. _____.
5. _____.

ELECTRICITY

1. _____.
2. _____.
3. _____.
4. _____.
5. _____.

Q-B Sort the given animals into herbivores, carnivores and omnivores.

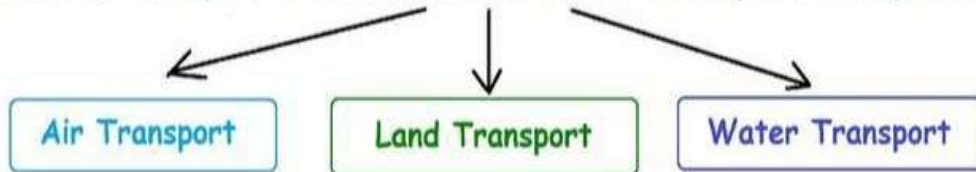
Herbivores	Carnivores	Omnivores

cow	lion	seal	elephant	monkey	goat
flamingo	rabbit	snake	pig	duck	tiger
eagle	owl	zebra	deer	human	ant
dolphin	horse	raccoon	squirrel	bison	jaguar

Q- C Read the vehicles name and write down in the correct box:-

Mode of Transport

Mode of Transport is a term used to define the ways of transportation.



Read the vehicles name and write down in the correct box.

- Rocket
- Bus
- Ship
- Train
- Helicopter
- Boat
- Truck
- Car
- Aeroplane
- Yatch

Air Transport

Land Transport

Water Transport

Q-D. Tick (✓) the correct option.

1. _____ is the gaseous form of water.

- a. Ice
- b. Water
- c. Vapour

2. water cannot be used for drinking.

- a. River
- b. Ocean
- c. Well

3. Pure water is colourless and

- a. tasteless
- b. odourless
- c. both

4. Plants produce oxygen by the process of

- a. breathing
- b. photosynthesis
- c. none

5. Windmill is used for

- a. generating electricity
- b. grinding
- c. both

6. Soil is home to

- a. rabbit
- b. deer
- c. chimpanzee

7. _____ are places where garbage is dumped.

- a. Dump
- b. Landfills
- c. Pit

G.K

Project:- Make a Caterpillar

Follow the steps given below to make a caterpillar using paper quilling:

- □ Cut a few strips the green coloured paper and roll each of them, as shown.
- □ After rolling all the strips, glue them together to make the body of the caterpillar.

- Cut out and roll back strips of paper and then white strips over it to make the eyes of the caterpillar.
- □ Now, glue the green roll to the eyes, as shown, to complete your caterpillar.

Your Caterpillar is Ready!

ANIMAL QUIZ

Q-1 Look at my shadow. Read the clues and find who am I.

1. I look like a horse. Each one of us has a unique pattern of black and white stripes.

2. I am an aquatic animal. You can easily recognise me with my eight long arms. I can move and crawl too. _____

3. I reside in the polar region. I have 42 teeth. I spend most of my time in the sea.

4. I am a large aquatic mammal. I spend my entire life in water. I breathe air through blowholes on my head.

5. I am a reptile. I can lose my tail and grow a new one soon enough.

TRAVEL INDIA

Q- B. Multiple choice questions. Tick (✓) the correct option.

1. Which of these is a Union Territory of India?

- a. Lakshadweep
- b. Assam
- c. Bihar
- d. Arunachal Pradesh

2. India lies in which continent?

- a. Asia
- b. America
- c. china
- d. Maldweep

3. Which of these is also called the Gateway to South India?

- a. Kolkata
- b. Mumbai
- c. New Delhi
- d. Chennai

4. Which is the longest river on the earth?

- a. Nile
- b. Ganga
- c. Yamuna
- d. None of these

5. Where is located Hawa Mahal?

- a. New Delhi
- b. Jaipur
- c. Agra
- d. Mumba

LET'S CELEBRATE

Q-C Fill in the blanks:-

1. The festival of Dussehra falls on the day after _____.
2. _____ is known as the Festival of Lights.
3. Bhai Dooj falls on the _____ day after Diwali.
4. Halloween is celebrated on 31st _____ every year.
5. Eid-ul-Fitr is a festival that marks the end of _____.
6. Every year, 15th August is celebrated as the _____ day.
7. _____ day is celebrated on the first Sunday of August every year.
8. Christmas, the birthday of Jesus Christ, is celebrated every year on 25th _____.
9. Raksha Bandhan is celebrated to signify the pious relation between _____ and _____.

EARTH AND THE SOLAR SYSTEM

Q-D Rewrite the following statements correctly. The underlined words need to be changed.

1. Jupiter is the only planet to have life on it.

Ans. _____.

2. A group of stars that appears to form a pattern is called galaxy.

Ans. _____.

3. Saturn is not considered a planet now.

Ans. _____.

4. The biggest planet is Earth.

Ans. _____.

5. Billions of stars together make a constellation.

Ans. _____.

6. Venus is also called a 'Red Planet'.

Ans. _____.

7. Mars is called the sister planet of Earth.

Ans. _____.

MORAL MIND

- **Use A4 size colored ruled sheets for writing answers for the following questions:**

1. Write down an incident when you behaved arrogantly. Did someone correct you? Do you realize that you were wrong? What will you do from now on?
2. Humility means “the state of being humble.” Why do you think God likes humility?
3. Why do you think it is important to know our good and bad behaviour? Do you think it helps in disciplining ourselves? Discuss with your parents and write your reviews.

- **Watch the film and answer the following questions: (Use A4 size colored sheets)**

In the classic family film E.T.: The Extra-Terrestrial, a young boy named Elliott makes friends with an alien who is stranded on Earth. Elliott tries to help E.T. “go home.” But other humans are afraid of E.T., and government scientists try to catch and study the alien. This film can help kids explore how people see others who are different.

- Q1. Why do the kids and adults see E.T. differently?
- Q2. Could Elliott have talked to his mom about E.T.? Why or why not?
- Q3. Who was your favorite character in the movie, and why? Write in your own words.

- **Make a beautiful poster on the Moral Values you learn in school or at your home. Use a full size chart paper for making the poster.**

COMPUTER

- Write down the manners and rules we should follow in a computer lab on A3 size sheet.

Q-1 Write down the names of the keys used for the following :-

1. To erase the character to the right cursor position. _____
2. To move the cursor to the next line. _____
3. To place the cursor at the end of the line. _____
4. To move the cursor to the top of the document. _____
5. To move the cursor or page down by one screen. _____

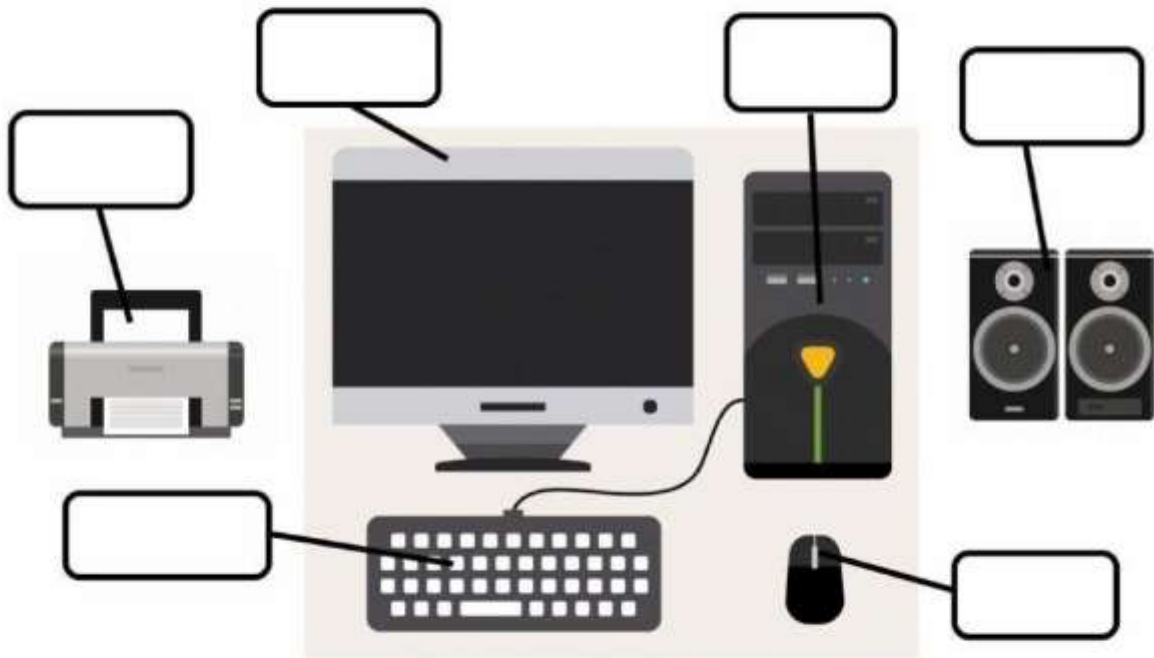


Match the following:

- | | |
|--------------------|---------------|
| 1. System Software | a. Keyboard |
| 2. Application | b. Pen Drive |
| 3. Input Device | c. Windows 7 |
| 4. Output Device | d. Calculator |
| 5. Storage Device | e. Printer |

COMPUTER PARTS

Monitor Keyboard Mouse CPU Speaker Printer



Fill in the boxes with the letters " I , P and O " .

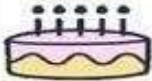
I - Input | **P-Process** | **O -Output**

Making Orange Juice



Teacher remarks

Making Birthday cake



Making clay model



Adding two numbers

15 + 25 =

15 and 25

Sum = 40

When you do some works on the computer ...



Draw a line and match the Keyboard Shortcut with their function.

Ctrl + C

F5

Ctrl + V

Ctrl + Z

Ctrl + X

F1

Ctrl + O

Ctrl + Y

Ctrl + P

Copy 

Print 

Cut 

Open 

Help 

Refresh 

Repeat
Typing 

Undo 

Paste 

Write **INPUT** or **OUTPUT** on the lines



DRAWING

- ❖ Draw any picture of your choice and paste crayon shavings in it.
- ❖ Use waste materials at your home and make best out of waste.
- ❖ Draw a picture and do blow painting in it.
- ❖ Make any one paper craft of your choice.

